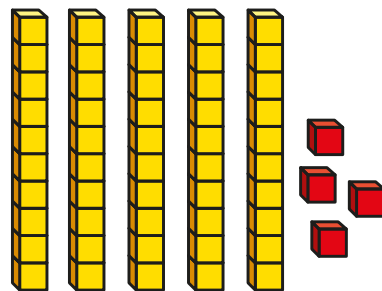
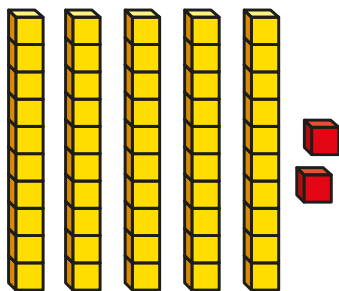


Comparing numbers (1)

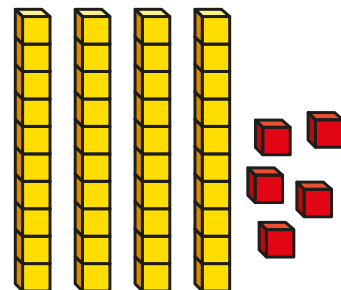
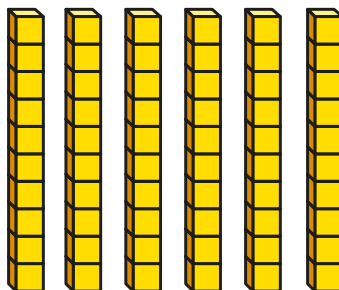
I Which is the greater number in each pair?

Tick your answers.

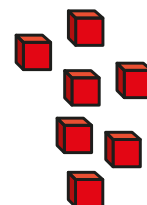
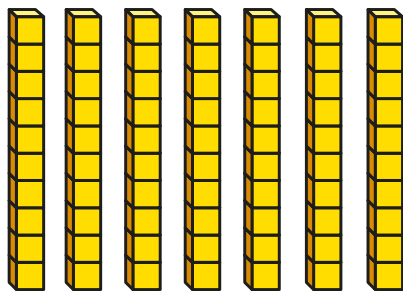
a)



b)




c)




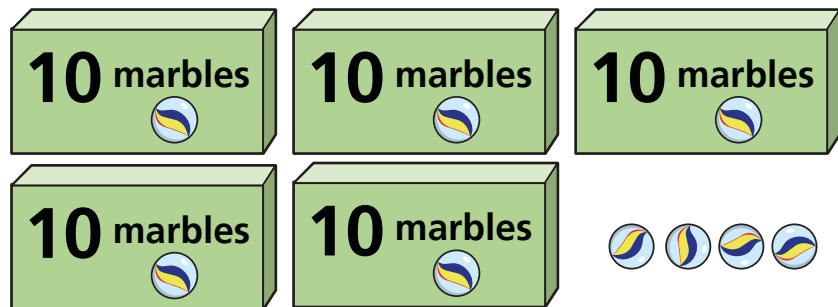
How do you know?




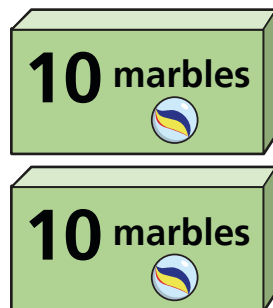
2 Mo and Kim each have some marbles.



Mo



Kim



a) How many marbles does Mo have?

b) How many marbles does Kim have?

c) Who has more marbles? _____

How do you know?



3 Use base 10



a) Make a number greater than 50

What number did you make?

b) Make a number less than 90

What number did you make?

c) Make a number greater than 80
but less than 100

What number did you make?

Talk about your answers.



4 Write **greater than** or **less than** to complete the sentences.

a) 72 is _____ 83

b) 100 is _____ 99

c) 65 is _____ 56