

Friday 29<sup>th</sup> January 2021

Good morning Hedgehogs,

It's the end of the week and it's been great to see all the things you have got up to and the progress you are making. Have a fabulous Friday!

Mrs Hoddy

**Subject Resources List**

**Handwriting:**

- Whiteboard
- Whiteboard pen
- OR
- Pencil
- Exercise Book/Paper

**Phonics:**

- Whiteboard
- Whiteboard pen
- Pencil
- Exercise book
- GROUP 2: paper

**Maths:**

- Pencils
- Paper
- Exercise book
- Whiteboard
- Whiteboard pen
- Number line (you could use a ruler)

**Geography:**

- A device to access a website which creates graphs

**Art:**

- Coloured paper
- Tissue paper
- Cotton wool
- String
- Sticks
- Foil
- Paint
- Glue
- Pasta
- Food colouring
- **Anything crafty you can find in your house!**

Handwriting  
(10 minutes)

Can you practice the letter **h**?

Try writing:

h


hat

hot

Hannah

Hannah was hot in her hat.

This video might help:



<https://www.youtube.com/watch?v=c5O-WtwwRfc>

Phonics Group  
1 (20-30  
minutes)

Today we are learning the 'ou' digraph. Watch the Phonics Fairy reading the story below:



Phonic Fairy Reads "Keep Out! Bears About!"

# ou



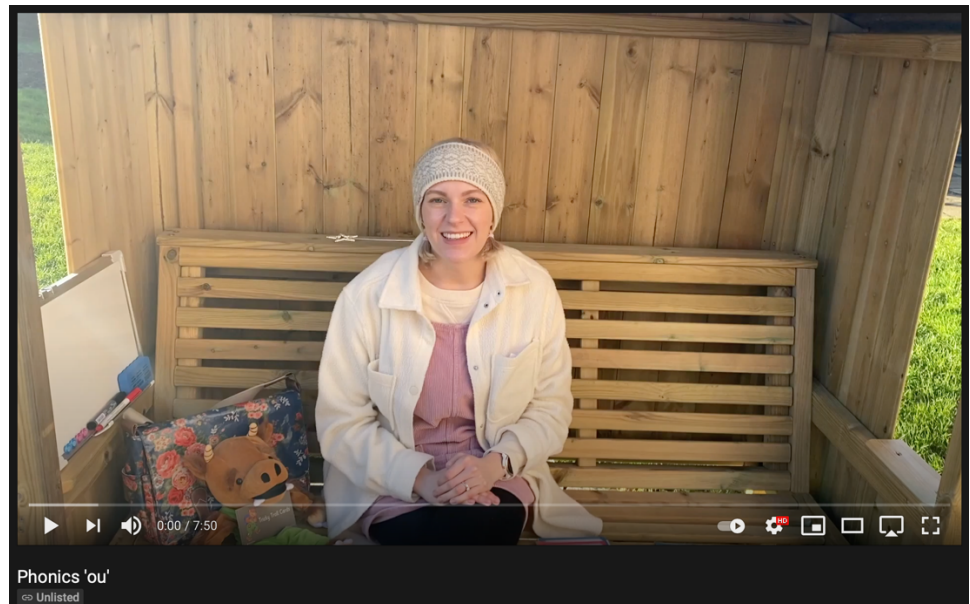
Login details:

<https://ttsstorytimephonics.co.uk/>

Username: Spornle Primary

Password: XA\$Li@VB!QM8NqSh8iyeQHMc

Watch the teaching video below:



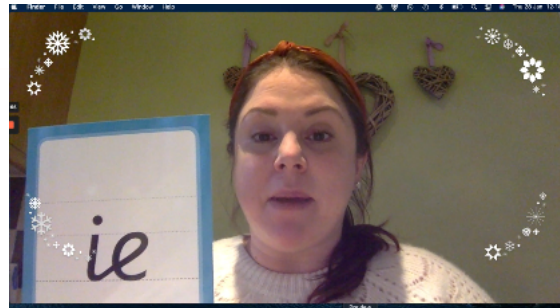
<https://www.youtube.com/watch?v=kx6QU2rk8OU>

Phonics Group  
2 (20-30  
minutes)

Today we are learning the 'ie' digraph. Watch the teaching video below:

<https://www.loom.com/share/6a71267e03594277836228f9d777ab94>

i-e/ie



ie ie tighten my tie

**Task:**

Fill in the missing words in the sentences from the list.

Baby Bear \_\_\_\_\_ when he saw all of his porridge had gone.

Goldilocks \_\_\_\_\_ she had eaten it, but the Jolly Postman had \_\_\_\_\_ her.

"It's not nice to \_\_\_\_\_", he said.

"I'm sorry," she \_\_\_\_\_. "It was me. I \_\_\_\_\_ all the bowls and yours was the best."

"That's ok," said Baby Bear, "I prefer apple \_\_\_\_\_ and custard anyway!"

Missing words:

pie

denied

spied

tried

cried

lie

replied

Maths (20  
minutes)

Today in maths we are consolidating how to compare  
addition and subtraction questions.

Choose either **Task 1 (slightly simplified)** or **Task 2 (for those  
that are confident)** and complete the two questions about  
fact families.

**Task A:**

1)

Draw counters to show each addition.  
Use two different colours.

a)

$$9 + 3$$



b)

$$6 + 7$$



c)

$$11 + 2$$



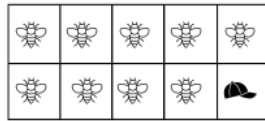
2)

Write the missing phrase.


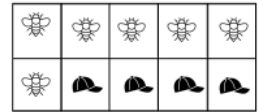
*less than*

*greater than*

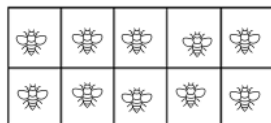
*equal to*



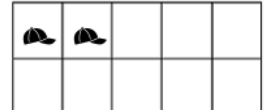
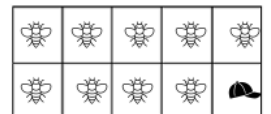
$$9 + 3$$



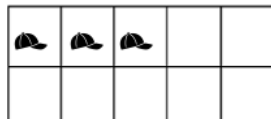
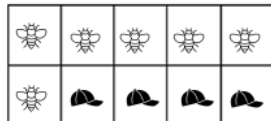
$$6 + 7$$



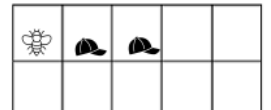
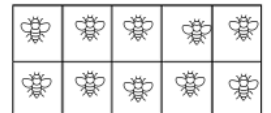
$$11 + 2$$



$$9 + 3$$



$$6 + 7$$



$$11 + 2$$

Can you also put the correct symbols?  $<$   $>$   $=$

Task B:

l)

Draw counters to show each addition.

Use two different colours.

a)

$9 + 3$



b)

$6 + 7$



c)

$11 + 2$



d) Write the missing phrase.

less than

greater than

equal to

$9 + 3$  is \_\_\_\_\_  $6 + 7$

$11 + 2$  is \_\_\_\_\_  $9 + 3$

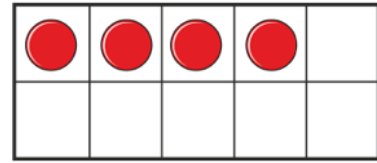
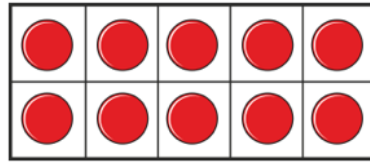
$6 + 7$  is \_\_\_\_\_  $11 + 2$



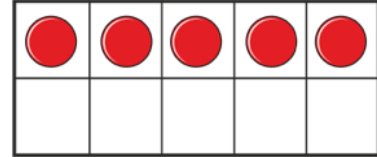
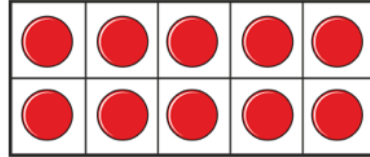
2)

Cross out counters to show each subtraction.

$14 - 5$



$15 - 6$



Write the missing phrase.

less than

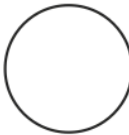
greater than

equal to

$14 - 5$  \_\_\_\_\_  $15 - 6$

3)

Write  $<$ ,  $>$  or  $=$  to compare the number sentences.

a)  $12 + 3$    $12 - 3$

b)  $17 - 4$    $17 - 6$

c)  $13 + 6$    $6 + 13$

d)  $14 - 4$    $1 + 0$

Did you have to work them all out?

Literacy and  
Art (15-20  
minutes)

*Lost and Found Topic*

*Task:*

*To continue writing your journey in your postcard. Write at least 1 more sentence about your journey and what happened. Remember to finish your postcard by saying who it's from (e.g. Love from....).*



Geography (20 minutes)

Comparing rainfall and making a graph:

<https://www.loom.com/share/23a95b02dfa4487181bct44cedff327e>



Now answer these questions:

Which day had the most rain?

Which day had the least rain?

YI- Can you work out the difference between the most rainfall and least rainfall?

Art

Weather Mobile Project

Task:

Make a weather mobile out of anything in your house (e.g., cotton wool, paper, tissue paper, wrapping paper, foil, food coloring, pasta shells, paint etc.). Can you make something for each weather including the sun, rain, clouds, snow and thunder and lightning.

Here are some pictures for inspiration:




WEATHER MOBILE  
Art & Craft Project for Kids



### Weather Mobile Collection

craftulate.com



Cosmic Kids  
Yoga/Singing

### Cosmic Kids Yoga:



<https://www.youtube.com/watch?v=KAT5NiWHEIU>